




Name _____

Date _____




I have 10 ones and 2 ones.

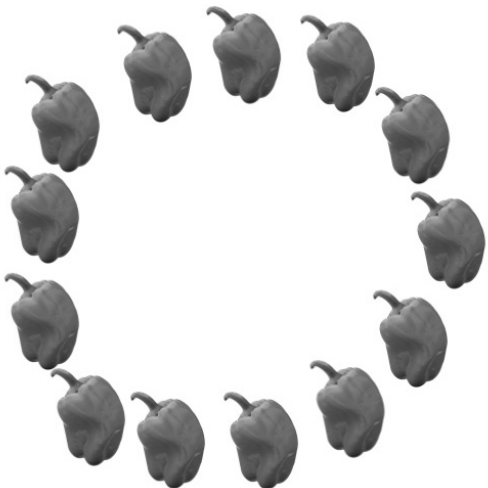
Count and circle 10 things. Tell how many there are in two parts, 10 ones and some more ones.




I have 10 ones and ____ ones.



I have ____ ones and ____ ones.



I have ____ ones and ____ ones.



I have ____ ones and ____ ones.



Draw your picture to match the words. Circle 10 ones.

I have 10 ones and 3 ones:

A large, empty rectangular box with a double-line border, intended for drawing a number model that represents 10 ones and 3 ones.

I have 10 ones and 8 ones:

A large, empty rectangular box with a double-line border, intended for drawing a number model that represents 10 ones and 8 ones.




Name _____

Date _____




I have 10 ones and 3 ones.

Circle 10 things. Tell how many there are in two parts, 10 ones and some more ones.




I have 10 ones and 2 ones.



I have 10 ones and ____ ones.



I have ____ ones and ____ ones.



I have ____ ones and ____ ones.